

$$7 + 3 = 10$$

$$10 = 8 + 2$$

$$9 - 1 = 8$$

$$10 - 5 = 5$$

$$10 = 6 + 4$$

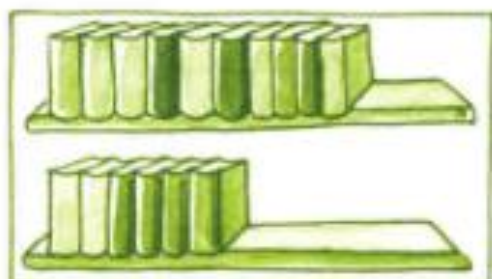
$$7 + 2 = 9$$

$$2 = 5 - 3$$

$$9 - 4 = 5$$

$$9 = 6 + 3$$

$$10 - 4 = 6$$



$$10 + 6 = 16$$




$$10 + 5 = 15$$



$$16 - 6 = 10$$



$$19 - 9 = 10 =$$



$$13 - 10 = 3$$



$$15 - 10 = 5$$



$10 + 3 = 13$



$10 + 5 = 15$

$18 - 8 = 10$

$12 - 10 = 2$

$10 + 8 = 18$

$19 - 9 = 10$

$11 - 10 = 1$

$19 - 9 = 10$

$10 + 1 = 11$

$13 - 3 = 10$

$16 - 10 = 6$

$10 + 5 = 15$

$17 - 7 = 10$

$20 - 10 = 10$

$12 - 10 = 2$

$10 + 6 = 16$

$14 - 4 = 10$

$15 - 10 = 5$



$10 + 9 = 19$

$10 + 9 = 19$



$11 - 1 = 10$

$13 - 10 = 3$

$17 - 7 = 10$

$16 - 6 = 10$

$14 - 10 = 4$

$15 - 5 = 10$

$18 - 10 = 8$

$10 + 8 = 18$

$10 + 5 = 15$

$7 + 10 = 17$

$13 - 3 = 10$

$13 - 10 = 3$

$18 - 10 = 8$

$12 - 10 = 2$

$10 + 5 = 15$

$12 - 2 = 10$

$10 + 4 = 14$

$10 + 2 = 12$



tim heeft 10 stickers en tine heeft er 7.
hoeveel stickers hebben ze samen?
tim en tine hebben samen **17** stickers.



emma schrijft 15 woorden.
ze schrijft 5 woorden fout.
hoeveel woorden schrijft emma juist?
emma schrijft **10** woorden juist.

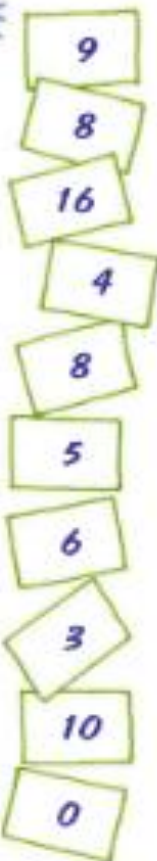


in de klas zitten 16 kinderen.
10 kinderen zijn kleiner dan jo.
hoeveel kinderen zijn groter dan jo?
6 kinderen zijn groter dan jo.



lies heeft 10 stickers
en lore heeft 19 stickers.
hoeveel stickers heeft lore meer dan lies?
lore heeft **9** stickers meer dan lies.





$$(2+4)+1=7$$



$$(3+1)+2=6$$



$$1+5+2=8$$

$$4+1+2=7$$

$$3+5+1=9$$

$$4+2+3=9$$

$$7+2+1=10$$

$$8+1+1=10$$

$$2+0+5=7$$

$$5+2+3=10$$

$$3+7+0=10$$

$$1+8+1=10$$



$$4+3+2=9$$

$$7+2+0=9$$

$$5+2+2=9$$

$$6+1+1=8$$

$$3+3+3=9$$

$$2+3+4=9$$

$$5+1+2=8$$


$$6+2+2=10$$

$$5+2+1=8$$

$$3+4+1=8$$



$$4+6+2=12$$



$$7+3+4=14$$



$$5 + 5 + 5 = 15$$



$$5 + 5 + 3 = 13$$

$$3 + 7 + 2 = 12$$

$$1 + 9 + 5 = 15$$

$$4 + 6 + 8 = 18$$

$$7 + 3 + 4 = 14$$

$$8 + 2 + 7 = 17$$

$$2 + 8 + 9 = 19$$

$$5 + 5 + 4 = 14$$

$$3 + 7 + 4 = 14$$

$$8 + 2 + 4 = 14$$



$$4 + 6 + 1 = 11$$

$$5 + 5 + 2 = 12$$

$$3 + 7 + 6 = 16$$

$$2 + 8 + 7 = 17$$

$$6 + 4 + 5 = 15$$

$$9 + 1 + 3 = 13$$

$$10 + 0 + 6 = 16$$

$$5 + 5 + 8 = 18$$

$$9 + 1 + 9 = 19$$

$$3 + 7 + 10 = 20$$



$$4 + 6 + 3 = 13$$



$$2 + 2 + 2 = 6$$



$$6 + 4 + 4 = 14$$



fatma eet 2  met jam en 2  met ham en 1  met kaas.

fatma eet $2 + 2 + 1 = 5$ 

bas eet 4 . hoeveel  eet bas minder dan fatma?

bas eet 1  minder dan fatma.



10
3 7
4 6
2 8
9 1
5 5

5
1 4
2 3
4 1
3 2
0 5

8
5 3
6 2
5 3
1 7
4 4



$9 - 2 = 7$
 $8 - 1 = 7$
 $10 - 2 = 8$
 $9 - 1 = 8$
 $10 - 1 = 9$

$10 - 4 = 6$
 $9 - 3 = 6$
 $8 - 2 = 6$
 $7 - 1 = 6$
 $10 - 3 = 7$

$9 - 5 = 4$
 $9 - 4 = 5$
 $9 - 6 = 3$
 $8 - 3 = 5$
 $8 - 5 = 3$



$6 - 2 - 1 = 3$



$8 - 2 - 1 = 5$

$7 - 3 - 1 = 3$

$9 - 1 - 2 = 6$



$7 - 2 - 3 = 2$
 $8 - 4 - 2 = 2$
 $9 - 5 - 4 = 0$
 $7 - 3 - 3 = 1$
 $6 - 1 - 1 = 4$



$8 - 3 - 2 = 3$
 $9 - 1 - 5 = 3$
 $7 - 2 - 2 = 3$
 $5 - 4 - 1 = 0$
 $8 - 1 - 4 = 3$





$$15 - 5 - 2 = 8$$






$$18 - 8 - 1 = 9$$





mie bakt



In een  liggen 12 .

mie doet eerst 2  in het deeg.

en daarna nog 2 .

hoeveel  zijn er nog in de  ?

er zijn nog **8**  in de .



$$14 - 4 - 1 = 9$$

$$16 - 6 - 2 = 8$$

$$13 - 3 - 5 = 5$$

$$18 - 8 - 1 = 9$$

$$15 - 5 - 2 = 8$$



$$3 + 3 + 2 = 8$$

$$15 - 5 - 2 = 8$$

$$5 + 5 + 4 = 14$$

$$18 - 8 = 10$$

$$8 - 3 - 2 = 3$$



$$12 - 2 - 4 = 6$$

$$14 - 4 - 4 = 6$$

$$11 - 1 - 5 = 5$$

$$17 - 7 - 2 = 8$$

$$19 - 9 - 2 = 8$$




$$17 - 7 = 10$$

$$10 + 5 = 15$$

$$9 - 2 - 4 = 3$$

$$16 - 6 - 2 = 8$$

$$8 + 2 + 4 = 14$$



$$9 - 2 - 5 = 2$$

$$7 - 5 - 2 = 0$$

$$8 - 5 - 3 = 0$$

$$6 - 2 - 1 = 3$$

$$9 - 7 - 2 = 0$$



$$5 - 4 - 1 = 0$$

$$9 - 6 - 2 = 1$$

$$8 - 4 - 2 = 2$$

$$7 - 6 - 1 = 0$$

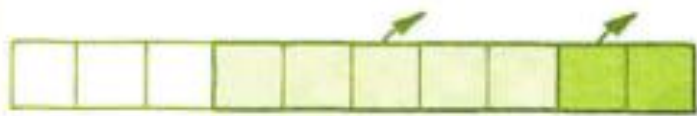
$$9 - 8 - 0 = 1$$




$$10 - 3 - 6 = 1$$



$$10 - 7 - 2 = 1$$



$$10 - 2 - 5 = 3$$



$$10 - 1 - 4 = 5$$



$$10 - 5 - 4 = 1$$

$$10 - 2 - 6 = 2$$

$$10 - 7 - 1 = 2$$

$$10 - 9 - 1 = 0$$

$$10 - 4 - 3 = 3$$



$$10 - 6 - 2 = 2$$

$$10 - 8 - 1 = 1$$

$$10 - 3 - 3 = 4$$

$$10 - 10 - 0 = 0$$

$$10 - 5 - 2 = 3$$



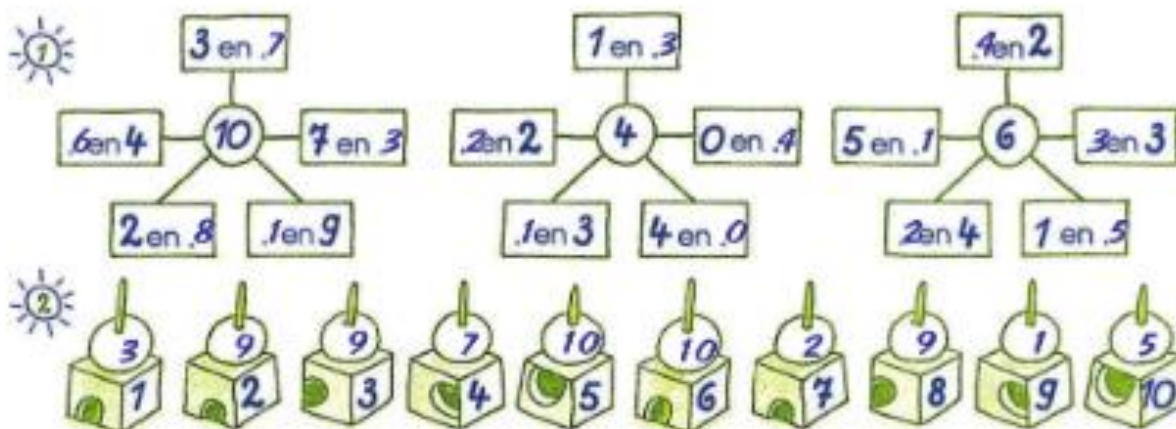
$$6 - 3 - 1 = 2$$

$$10 - 2 - 4 = 4$$

$$9 - 1 - 5 = 3$$

$$7 - 2 - 5 = 0$$

$$10 - 5 - 2 = 3$$



3

$15 - 5 - 2 = 8$

$8 + 2 + 6 = 16$

$16 - 6 - 3 = 7$

$10 - 2 - 1 = 7$

4

$6 + 4 + 3 = 13$

$13 - 3 = 10$

5

tim bouwt een van 15 .

zijn zus stoot 5 om

en poes springt 2 omver.

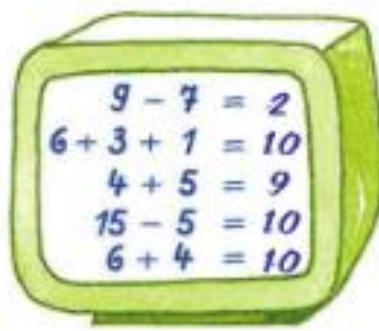
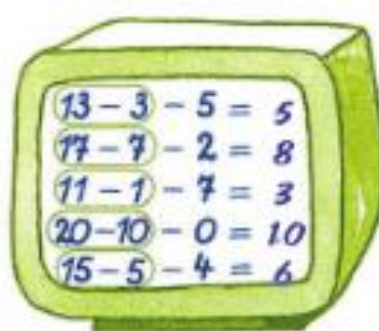

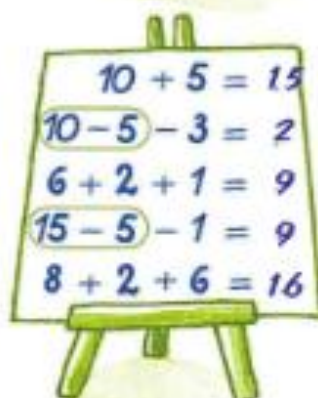
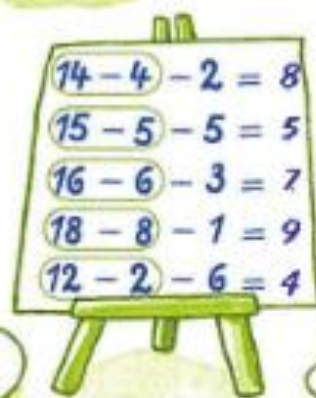
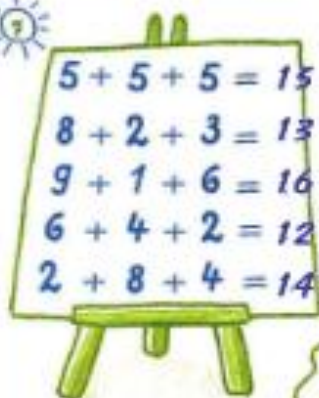
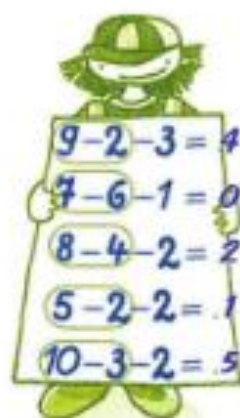
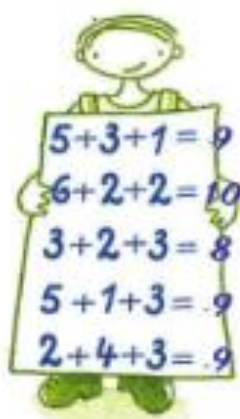
hoe hoog is de nog?

de is nog **8** hoog.

kim bouwt een van 10 .

hoeveel is de van tim hoger?

de van tim is **2** hoger.



- ik doe 5 bij 10, dat is **15**
- 10 min 3 is **7**
- 4 meer dan 10 is **14**
- de som van 5 en 4 en 1 is **10**
- ik doe **8** bij 10 en heb nu 18.

- ik trek 7 af van 17, dat is **10**
- $16 - 6 = 10$
- de som van 9 en 10 is **19**
- 10 12 14 **16**
- 14 komt juist voor **15**



$$10 - 3 - 5 = 2$$



$$10 - 4 - 2 = 4$$

$$10 - 3 - 1 = 6$$

$$10 - 5 - 5 = 0$$

$$10 - 2 - 7 = 1$$

$$10 - 7 - 1 = 2$$



$$10 - 1 - 2 = 7$$



$$10 - 6 - 1 = 3$$



$$10 + 7 = 17$$

$$17 - 7 = 10$$

$$8 + 2 + 6 = 16$$

$$14 - 4 - 6 = 4$$

$$10 + 5 = 15$$

$$18 - 8 = 10$$

$$6 + 4 + 2 = 12$$

$$15 - 5 - 2 = 8$$

$$2 + 10 = 12$$

$$12 - 2 = 10$$

$$7 + 3 + 5 = 15$$

$$17 - 7 - 1 = 9$$

$$10 + 1 = 11$$

$$11 - 1 = 10$$

$$5 + 5 + 4 = 14$$

$$13 - 3 - 4 = 9$$

$$10 + 10 = 20$$

$$20 - 10 = 10$$

$$9 + 1 + 6 = 16$$

$$11 - 1 - 7 = 3$$



$5 + 3 + 2 = 10$

$2 + 3 + 1 = 6$

$6 + 3 + 1 = 10$

$5 + 4 + 0 = 9$

$8 + 1 + 1 = 10$

$3 + 3 + 2 = 8$

$9 - 2 - 3 = 4$

$7 - 4 - 3 = 0$

$8 - 2 - 5 = 1$

$6 - 1 - 2 = 3$

$5 - 0 - 5 = 0$

$9 - 7 - 1 = 1$

$10 - 5 - 2 = 3$

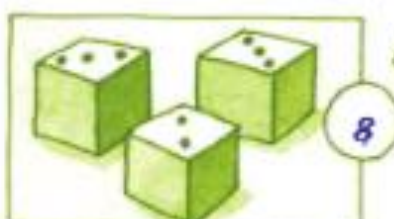
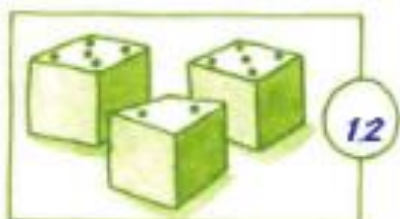
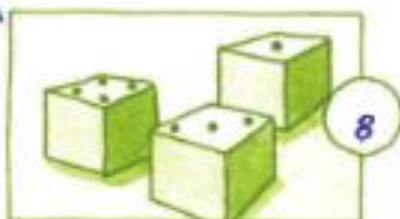
$10 - 8 - 1 = 1$

$10 - 7 - 2 = 1$

$10 - 5 - 5 = 0$

$10 - 3 - 7 = 0$

$10 - 1 - 6 = 3$



tim, tine en tom vissen samen 10.



$2 + 3 + 5$

$2 + 4 + 4$

$3 + 2 + 5$

$3 + 3 + 4$

$3 + 4 + 3$

$3 + 6 + 1$

$5 + 2 + 3$

$5 + 4 + 1$

$6 + 1 + 3$

$6 + 3 + 1$

$2 + 5 + 3$

$3 + 5 + 2$